

Q1 Select the correct answers for questions given below.

10

1. Identify the given visual of correct dance form :



- a) Kathakali b) Theyyam c) Mohiniyattam d) Margam Kali

2. Identify correct logo for Make in India.



- a) b) c) d) None

3. Identify the correct option for the given visual



- a) Pan card of India b) Ration card of India
c) Unique Identification Authority of India d) Reserve bank of India

Q1 Continued...

4. The north east states of India are popularly known as “land of 7 sisters and 1 brother”.
Mark the state known as brother :
- a) Arunachal Pradesh b) Assam c) Imphal d) Sikkim
5. The fashion designer, Coco Chanel belongs to which country?
- a) France b) Taiwan c) Russia d) Finland
6. Zara, one of the biggest fashion brands in the world, is from?
- a) New Zealand b) France c) Portugal d) Spain
7. The author of Jungle Book is:
- a) Rudyard Kipling b) Arundhati Roy c) R. K. Narayan d) Chetan Bhagat
8. The Miss India 2018 is:
- a) Anukreethy Vas b) Nehal Chudasama
c) Urvashi Rautela d) Noyonita Lodh
9. The 7 colours of rainbow are commonly known as :
- a) VIBGYOR b) VIGBORY c) GBORYIV d) ROYGIBV
10. Who among the following is not a fashion designer?
- a) Ritu Kumar b) Shiv Kumar Sharma
c) Tarun Tahiliani d) Rahul Khanna



Q2 Analytical / Logical Thinking

10

1. If 45 students can consume a stock of food in 2 months, find for how many days the same stock of food will last for 27 students.

- a) 100 b) 120 c) 85 d) 110

2. Give the synonym for 'Against the grain'.

- a) Contrary to one's nature or inclination b) Against the law of nature
c) Trying very hard to achieve something impossible d) Against the will of others

3. In the series 7, 10, 8, 11, 9, 12... What number should come next?

- a) 15 b) 10 c) 17 d) 11



4. Which word does NOT belong with the others?

- a) guitar b) flute c) violin d) cello

5. Which of the following diagrams indicates the best relation between Women, Mothers and Engineers?

- a)  b)  c)  d) 

6. What is the missing last grid?



- 1) 2) 3) 4) 5) 6)

Q2 Continued...

7. Which one will replace the question mark ?

5	4	7	△	8
---	---	---	---	---

6	9	5	△	10
---	---	---	---	----

3	7	2	△	?
---	---	---	---	---

- a) 8 b) 9 c) 10 d) 11

8. Choose the word which is different from the rest.

- a) Curd b) Butter c) Oil d) Cheese

9. A, P, R, X, S and Z are sitting in a row. S and Z are in the centre.

A and P are at the ends. R is sitting to the left of A. Who is to the right of P ?

- a) A b) X c) S d) Z

10. Arrange the words given below in a meaning full sequence

- 1) Family
- 2) Community
- 3) Member
- 4) Country

- a) 3, 1, 2, 4 b) 3, 1, 2, 4 c) 3, 1, 4, 2 d) 3, 1, 4, 2




Q3 Sketch your design here

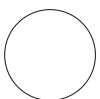



Q4 Use the following given images and create motif by combining all 3 together.
Use the same motif to create repeat for the T-shirt given below

15



Motif



Q5 Identify and write the correct name of iconic crafts and the state that it belongs to

10



Craft Name

.....

State

.....



Craft Name

.....

State

.....




Craft Name

.....

State

.....



Craft Name

.....

State

.....



Craft Name

.....

State

.....



Q6 Identify any 3 different surface details from the given visual. Draw the surface details by using pencil and also write the attributes according to you for each of the surface details.

10



1. Illustrate the texture

Describe its attributes:


2. Illustrate the texture

Describe its attributes:

3. Illustrate the texture


Describe its attributes:

Q6 Design a poster using all three chosen visual references for theme- Save Environment






Q7 Draw an Indian traditional lower garment for the given garment visual. The details of trims and stitches should be clearly visible

10





Q9 What according to you is each character speaking in the comic strip given below?
Select the theme/ concept that continues in all five frames.

10



Q9 Continued...



FOR ROUGH WORK

A large, empty rectangular box with a thin black border, occupying most of the page below the header. It is intended for rough work or calculations.